

Addition

Grade 1

Table of Contents

● Fishy Facts ● (Addition facts to 6)1	● Robbie Robot ● (Adding 3 numbers—sums greater than 10)13
● S-s-s-uper Sums ● (Addition facts to 6)2	● Add and Match ● (Adding multiples of 10 and 1-digit numbers)14
● Let's Hop! ● (Addition facts to 10)3	● Down the Hill ● (Adding 2-digit and 1-digit numbers)15
● Icy Sums ● (Addition facts to 10)4	● Clickety-Clack! ● (Adding multiples of 10)16
● Harry's Riddle ● (Addition facts to 12)5	● Score with Addition ● (Adding 2-digit numbers without regrouping)17
● A Gentle Giant ● (Addition facts to 12)6	● A Mystery Number ● (Adding 2-digit numbers without regrouping)18
● Sailing Fun ● (Addition facts to 15)7	● In the Ocean ● (Adding 2-digit numbers without regrouping)19
● Splish, Splash! ● (Addition facts to 15)8	● Number Roundup ● (Adding 2-digit numbers without regrouping)20
● Spotted Butterflies ● (Addition facts to 18)9	● Learning Extenders ● (Related Teaching Ideas)21–22
● Caterpillar Math ● (Addition facts to 18)10	● Answer Key23–24
● Number Wheels ● (Addition facts to 18)11	
● In the Air ● (Adding 3 numbers—sums up to 10)12	

TN-3003 Addition, Grade 1

ISBN 1-58857-015-0 All rights reserved.

Copyright © 2000 TeachNow.com


PO Box 57037, Number 448 • Irvine, CA 92619-2619

NOTICE: The teacher may reproduce copies of materials in this book for his or her own classroom use only. The reproduction of any part of these materials for any other person or organization, including but not limited to an entire school or school system, is strictly prohibited. Except as stated above, no part of this publication may be reproduced or transmitted by any means, electronic or mechanical, without prior written authorization from the publisher. For permission information or questions, please contact us by e-mail: rights@TeachNow.com. For all other information, please visit our website: www.TeachNow.com.

Fishy Facts


Look at the fish in each tank. Write an addition sentence about each picture.

A.




$$\underline{\quad} + \underline{\quad} = \underline{\quad}$$

B.




$$\underline{\quad} + \underline{\quad} = \underline{\quad}$$

C.




$$\underline{\quad} + \underline{\quad} = \underline{\quad}$$

D.




$$\underline{\quad} + \underline{\quad} = \underline{\quad}$$

E.



$$\underline{\quad} + \underline{\quad} = \underline{\quad}$$

F.

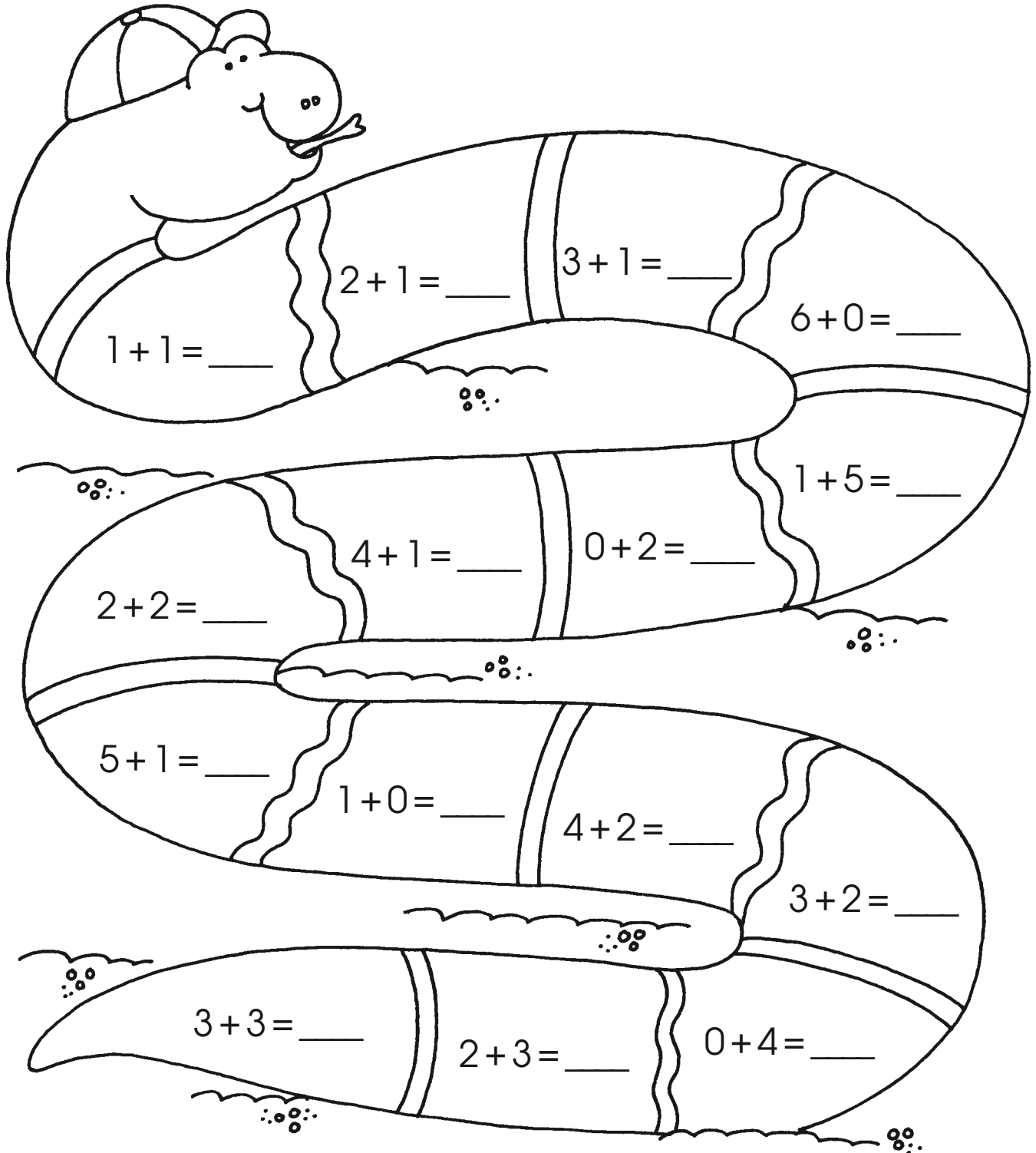


$$\underline{\quad} + \underline{\quad} = \underline{\quad}$$

Be Creative! Draw a fish tank. Add some red fish and some yellow fish. Write an addition sentence about your picture.

S-s-s-uper Sums

Add. Write the sums on the snake.



Have Some Fun! Color the snake to make a pattern of colors.